



## AİLEM

Merhaba. Benim adım Nisa. Ben 5 yaşındayım. Evin en küçüğü benim. Benim bir de ablam var. Onun da adı Selin. Biz altı kişilik bir aileyiz. Dedem ve babaannem bizlerle yaşıyor. Biz mutlu bir aileyiz.



## SORULAR

1-) Nisa kaç yaşındadır?

2-) Evin en küçüğü kimdir?

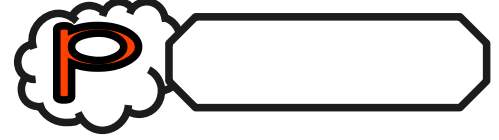
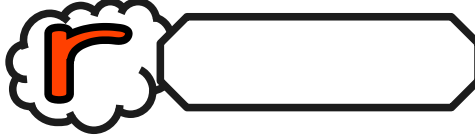
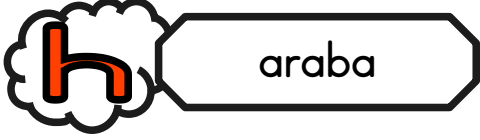
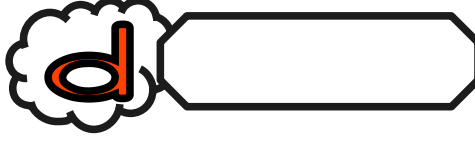
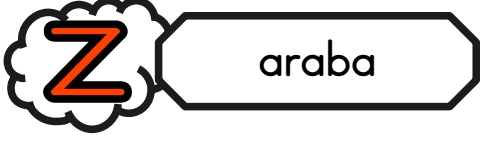
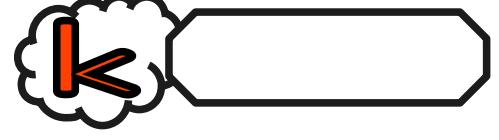
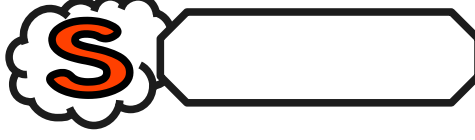
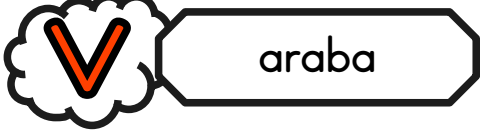
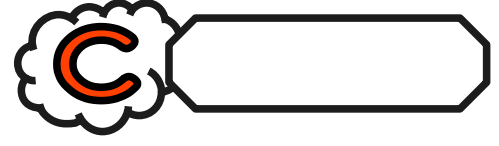
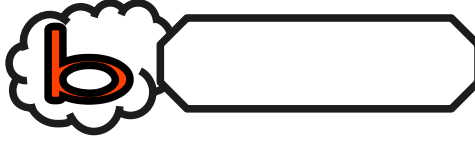
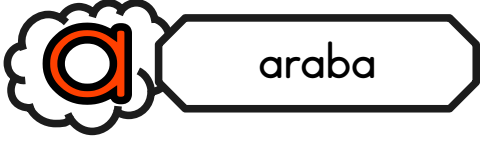
3-) Nisa'nın ablasının adı nedir?

4-) Nisa'nın ailesi kaç kişiliktir?


5-) Nisa'nın ailesi nasıl bir ailedir?




Verilen örneğe göre verilen harflerle başlayan isimler yazınız.




Görselde verilen varlıkları boyadıktan sonra isimlerini altlarına yazınız.




.....



.....




.....



.....




.....



.....



Kurbağayı doğru yoldan gölüne ulaştırınız. Kurbağa yolda hangi harflerle karşılaşmıştır labirentin altına yazınız.



---

---

---



## Verilmeyen Toplananı Bulalım-1



Aşağıdaki işlemlerde verilmeyen terimleri bulalım. Bulmak için yaptığımız işlemleri yanlarına yazalım.

$$\begin{array}{r} 2 \\ + \square \\ \hline 4 \end{array}$$

$$\begin{array}{r} 6 \\ + \square \\ \hline 9 \end{array}$$

$$\begin{array}{r} 5 \\ + \square \\ \hline 5 \end{array}$$

$$\begin{array}{r} 5 \\ + \square \\ \hline 10 \end{array}$$

$$\begin{array}{r} 4 \\ + \square \\ \hline 10 \end{array}$$

$$\begin{array}{r} 8 \\ + \square \\ \hline 13 \end{array}$$

$$\begin{array}{r} 18 \\ + \square \\ \hline 20 \end{array}$$

$$\begin{array}{r} 15 \\ + \square \\ \hline 15 \end{array}$$

$$\begin{array}{r} 10 \\ + \square \\ \hline 20 \end{array}$$

$$\begin{array}{r} 1 \\ + \square \\ \hline 7 \end{array}$$

$$\begin{array}{r} 2 \\ + \square \\ \hline 7 \end{array}$$

$$\begin{array}{r} 10 \\ + \square \\ \hline 17 \end{array}$$

$$\begin{array}{r} 7 \\ + \square \\ \hline 14 \end{array}$$

$$\begin{array}{r} 3 \\ + \square \\ \hline 6 \end{array}$$

$$\begin{array}{r} 13 \\ + \square \\ \hline 16 \end{array}$$

$$\begin{array}{r} 12 \\ + \square \\ \hline 19 \end{array}$$



Verilmeyen Toplananı Bulalım



Aşağıdaki toplama işlemlerinin sonuçlarını tahmin ediniz. Tahmininizi işlem sonucu ile karşılaştırınız.



14

10

10

10

+ .....

+ .....

+ .....

+ .....

17

15

17

16



13

15

12

7

+ .....

+ .....

+ .....

+ .....

19

20

20

20



8

9

4

6

+ .....

+ .....

+ .....

+ .....

16

18

8

12



11

11

11

11

+ .....

+ .....

+ .....

+ .....

14

15

17

16



12

12

12

12

+ .....

+ .....

+ .....

+ .....

19

15

17

16