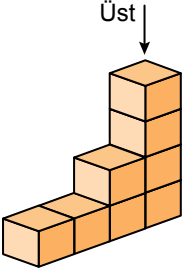



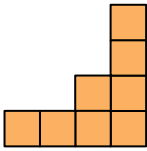
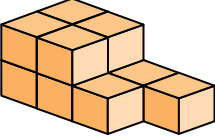


Cisimlerin Farklı Yönlerden Görünümleri

1. 

Şekildeki yapının üstten görünümü aşağıdakilerden hangisidir?

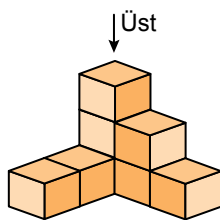
- A) 
- B) 
- C) 
- D) 

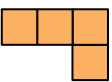
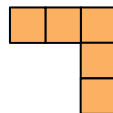


2. 

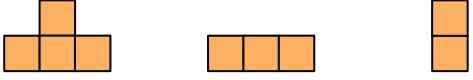
Aşağıdakilerden hangisi şekildeki yapının herhangi bir yönden görünümü değildir?

- A) 
- B) 
- C) 
- D) 

3. Yandaki yapının üstten görünümü aşağıdakilerden hangisidir?



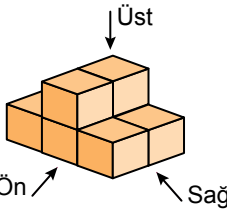
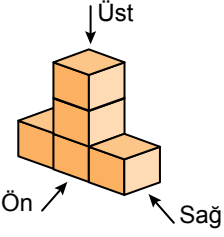
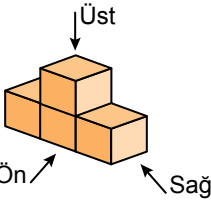
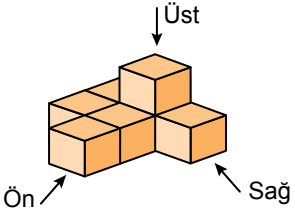
- A) 
- B) 
- C) 
- D) 


4. 

Önden Görünüm Üstten Görünüm Sağdan Görünüm

Şekilde bir yapının farklı yönlerden görünümü verilmiştir.

Bu yapı aşağıdakilerden hangisi olabilir?

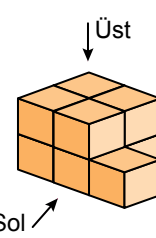
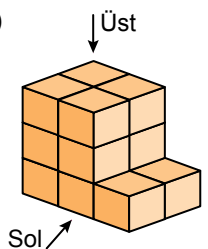
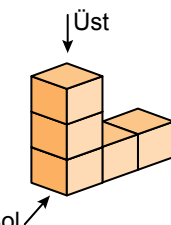
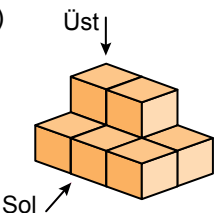
- A) 
- B) 
- C) 
- D) 

5. 

Üstten Görünüm Soldan Görünüm

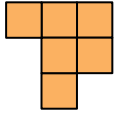
Şekilde bir yapının farklı yönlerden görünümü verilmiştir.

Bu yapı aşağıdakilerden hangisi olabilir?

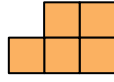
- A) 
- B) 
- C) 
- D) 

Cisimlerin Farklı Yönlerden Görünümleri

6.

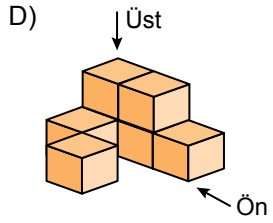
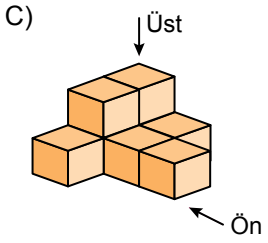
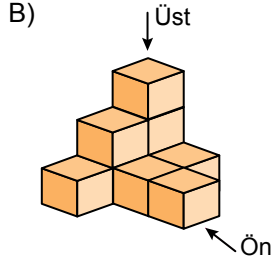
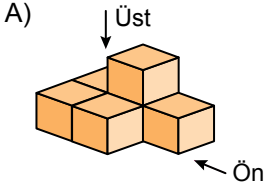


Üstten Görünüm

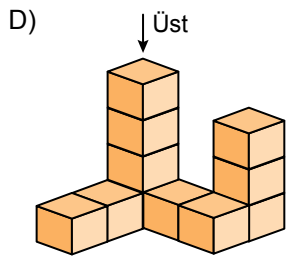
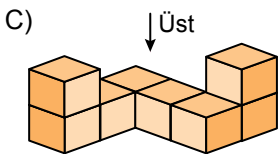
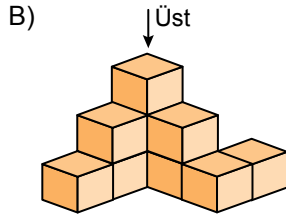
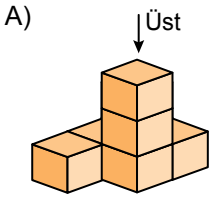
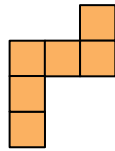


Önden Görünüm

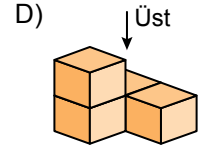
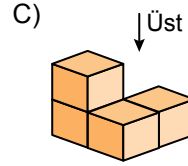
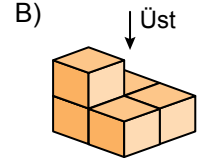
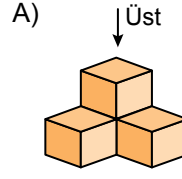
Üstten ve önden görünümü verilen yapı aşağıdakilerden hangisi olabilir?



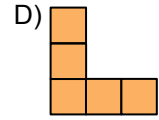
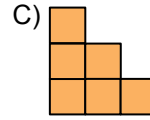
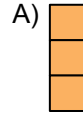
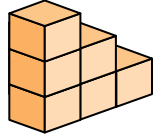
7. Üstten görünümü verilen yapı aşağıdakilerden hangisi ola-
maz?



8. Aşağıdaki yapılardan hangisinin üstten görünümü farklıdır?



9. Aşağıdakilerden hangisi yanda verilen yapının herhangi bir yönden görünümü değildir?



10. Önden ve sağdan görünümü verilen yapı aşağıdakilerden hangisi olabilir?

