
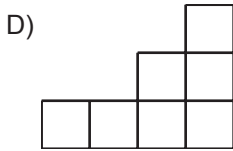


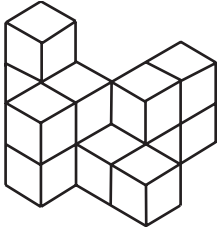
1.



Şekildeki yapının üstten görünümünü aşağıdakilerden hangisidir?



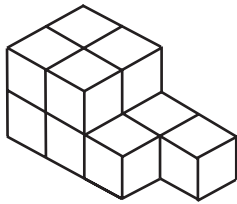
2.



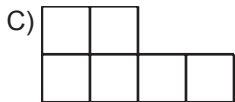

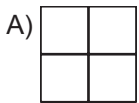
Şekildeki yapıyı oluşturmak için en az kaç adet birim küp kullanılmıştır?

A) 10
C) 12B) 11
D) 13

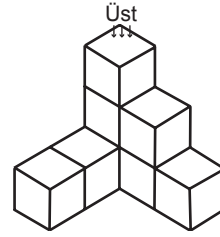
3.



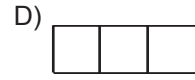
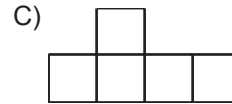
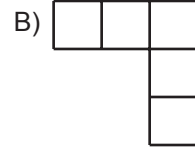
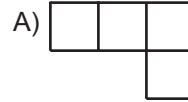
Aşağıdakilerden hangisi şekildeki yapının herhangi bir yönden görünümünü değildir?



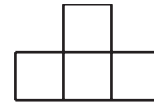
4.



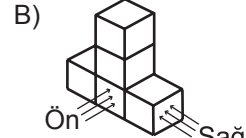
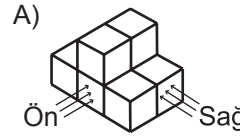
Şekildeki yapının üstten görünümünü aşağıdakilerden hangisidir?



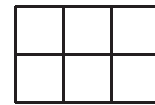
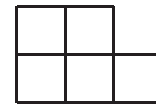
5.

Önden
GörünümÜstten
GörünümSağdan
Görünüm

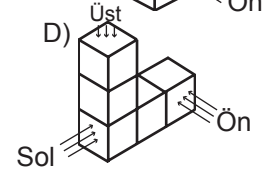
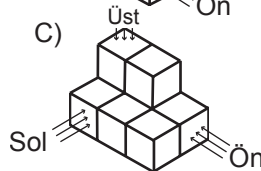
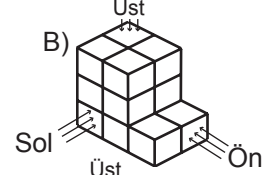
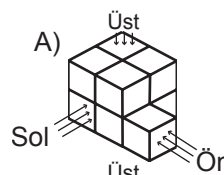
Şekilde bir yapının farklı yönlerden görünümü verilmiştir. Bu yapı aşağıdakilerden hangisi olabilir?

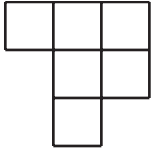
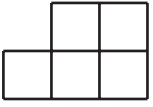


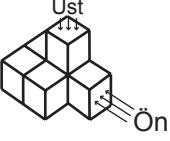
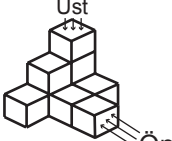
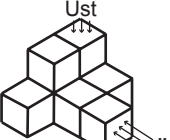
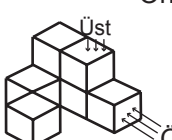
6.

Üstten
GörünümSoldan
Görünüm

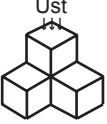

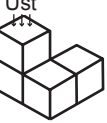

Şekilde bir yapının farklı yönlerden görünümü verilmiştir. Bu yapı aşağıdakilerden hangisi olabilir?

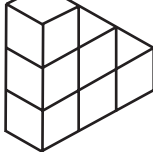


7.  
Üstten Görünüm Önden Görünüm
- Üstten ve önden görünümü verilen yapı aşağıdakilerden hangisidir?


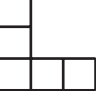
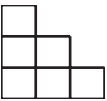

- A)  Üst
Ön
- B)  Üst
Ön
- C)  Üst
Ön
- D)  Üst
Ön

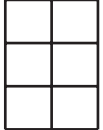
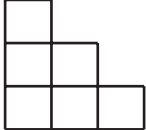
8. Aşağıdaki yapılardan hangisinin üstten görünümü farklıdır?

- A)  Üst
- B)  Üst
- C)  Üst
- D)  Üst

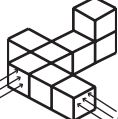
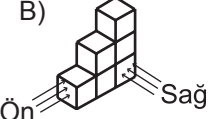


9. 

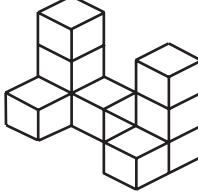
Aşağıdakilerden hangisi verilen yapının herhangi bir yönden görünümü değildir?

- A) 
- B) 
- C) 
- D) 

10.  
Önden Görünüm Sağdan Görünüm

Önden ve sağdan görünümü verilen yapı aşağıdakilerden hangisidir?

- A)  Ön Sağ
- B)  Ön Sağ
- C)  Ön Sağ
- D)  Ön Sağ

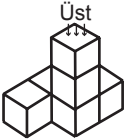
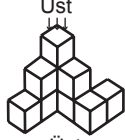
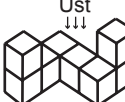

11. 

Yukarıdaki yapıyı oluşturmak için en az kaç adet birim küp kullanılmıştır?

- A) 11
C) 9
- B) 10
D) 8

12. 

Üstten görünümü verilen yapı aşağıdakilerden hangisi olamaz?

- A)  Üst
- B)  Üst
- C)  Üst
- D)  Üst